



Practise your
number formation.

If you try really
hard with your
phonics and
Maths this week,
ask your grown
up if you can
print out a
certificate.

Maths

YR R





Amazing Superhero!

Congratulations to _____

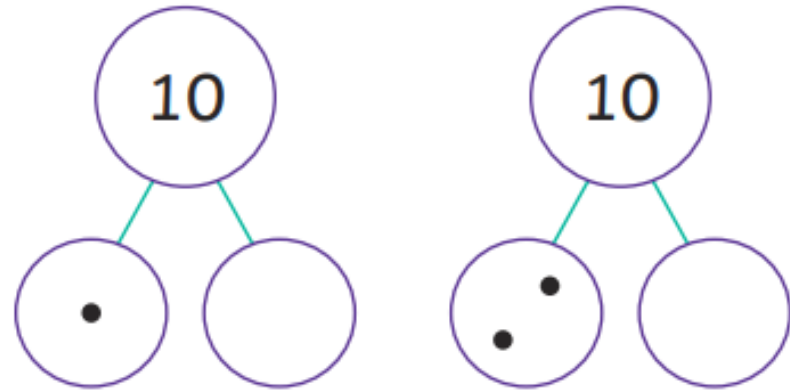
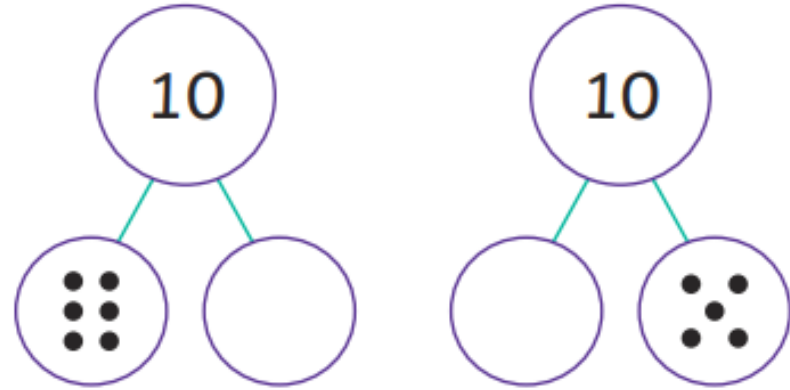
for _____

Date _____ Signed _____

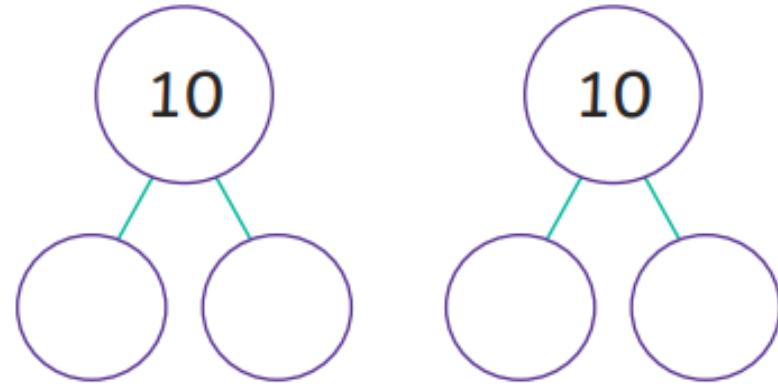
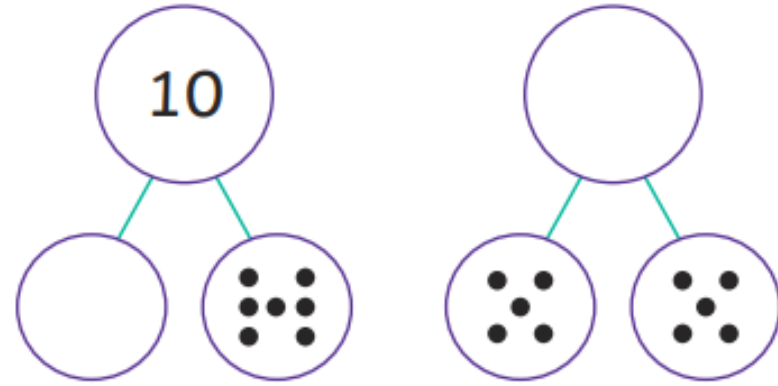


Monday

Part-Whole Number Bonds to 10



Part-Whole Number Bonds to 10



Tuesday

Number Shape Addition to 20

$$\begin{array}{|c|} \hline \bullet \\ \hline \bullet \bullet \\ \hline \end{array} + \begin{array}{|c|} \hline \bullet \\ \hline \bullet \bullet \\ \hline \end{array} = \square$$

$$\begin{array}{|c|} \hline \bullet \\ \hline \bullet \bullet \bullet \\ \hline \end{array} + \begin{array}{|c|} \hline \bullet \bullet \\ \hline \bullet \bullet \\ \hline \end{array} = \square$$

$$\begin{array}{|c|} \hline \bullet \bullet \bullet \\ \hline \bullet \bullet \bullet \\ \hline \end{array} + \begin{array}{|c|} \hline \bullet \\ \hline \bullet \bullet \\ \hline \end{array} = \square$$

$$\begin{array}{|c|} \hline \bullet \\ \hline \bullet \bullet \bullet \bullet \\ \hline \end{array} + \begin{array}{|c|} \hline \bullet \\ \hline \bullet \bullet \\ \hline \end{array} = \square$$

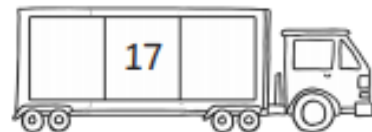
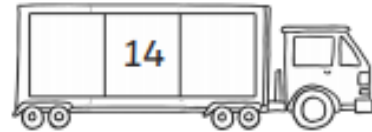
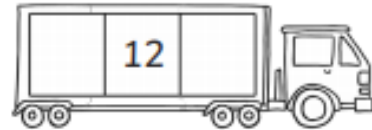
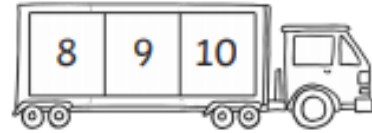
$$\begin{array}{|c|} \hline \bullet \\ \hline \bullet \bullet \bullet \bullet \\ \hline \end{array} + \begin{array}{|c|} \hline \bullet \bullet \\ \hline \bullet \bullet \\ \hline \end{array} = \square$$

$$\begin{array}{|c|} \hline \bullet \bullet \bullet \bullet \\ \hline \bullet \bullet \bullet \bullet \\ \hline \end{array} + \begin{array}{|c|} \hline \bullet \bullet \bullet \bullet \\ \hline \bullet \bullet \bullet \bullet \\ \hline \end{array} = \square$$

Wednesday

One More, One Less Number Writing Sheet

Write the numbers that come before and after.



Thursday

Adding More

Add 2 more children to the bus.




How many children are there?

Add 1 more apple to the fruit bowl.



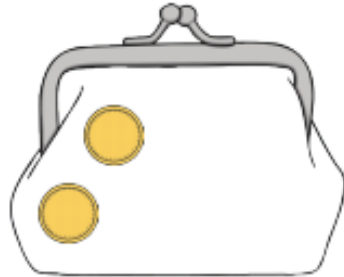
How many apples are there?

Add 4 more fish to the fish tank.



How many fish are there?

Add 3 more coins to the purse.



How many coins are there?


1 2 3 4 5
6 7 8 9 10



Friday

Counting to 20


Can you count the eggs in the nest?



Can you count the ducklings in the pond?



How many flowers are on the bush?



What numbers come next?

12, 13, 14, ,

- 1 2 3 4 5
- 6 7 8 9 10

