

Maths

YR R

Practise writing
your teen
numbers.

I can write TEEN numbers!

11 11

16 16

12 12

17 17

13 13

18 18

14 14

19 19

15 15

20 20

Give yourself a tick or smiley
face each day you complete
your challenge, good luck.

	Phonics	Maths
Monday		
Tuesday		
Wednesday		
Thursday		
Friday		

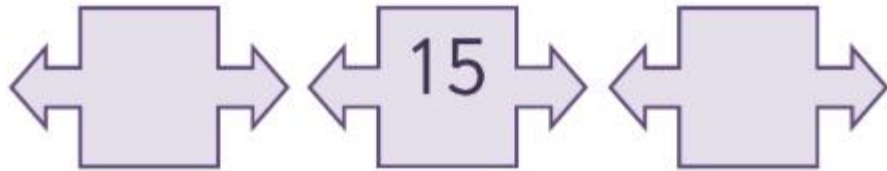
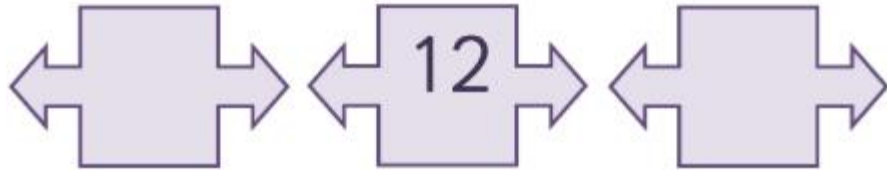
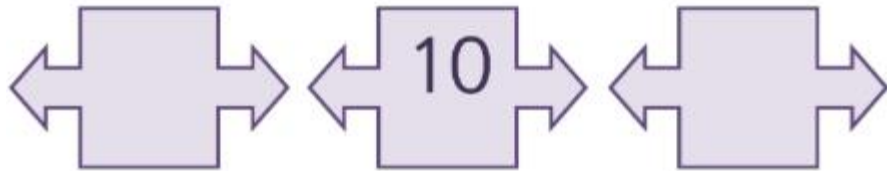
Monday



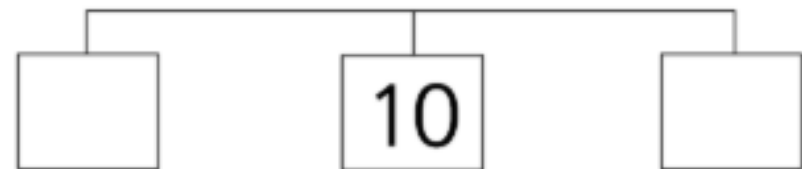

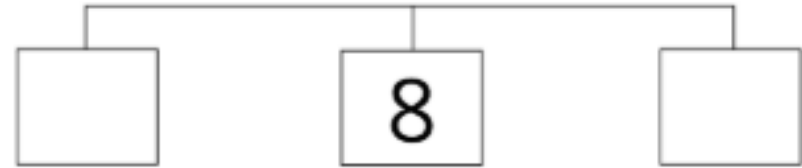
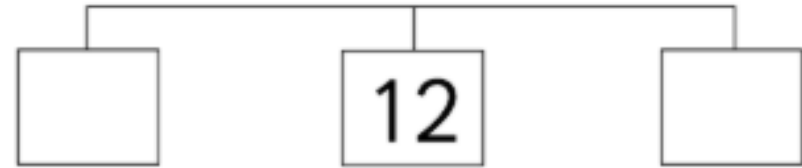
Write the numbers one less than and one more than the number shown.

One less than

One more than



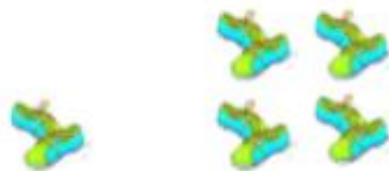
Write the numbers one less than and one more than the number shown.



Tuesday



5 shoes and 5 shoes make shoes.



2 shoes and 8 shoes make shoes.



4 shoes and 6 shoes make shoes.



6 shoes and 4 shoes make shoes.



6 shoes and 5 shoes make shoes.



8 shoes and 4 shoes make shoes.

Wednesday

Write the three numbers below in order, from left to right, starting with the smallest.

14 17 12

Write the three numbers below in order, from left to right, starting with the smallest.

20 15 18

Thursday



10p shop sale

How much change would you get if you gave 10p to pay for each of these items.



5p

Change: _____ p

4p

Change: _____ p

6p

Change: _____ p

1p

Change: _____ p

3p

Change: _____ p

7p

Change: _____ p

2p

Change: _____ p

8p

Change: _____ p

You might want to write each question as a sum

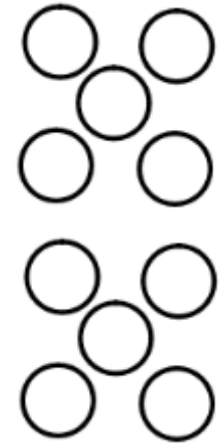

$$10p - 5p =$$

$$10p - 6p =$$

Friday

Star Number Bonds to 10

Write the missing number to make each star equal to 10.



You might want to use spots, counters or fingers to help you.