

Y2 Mental Maths 3 – 15 questions, try to do 3 every day



- 1) What is 10 plus 5?
- 2) What is 20 minus 6?
- 3) Write down the number thirty seven in numbers.

- 1) Add together 5 and 8, or, 35 and 8
- 2) Find the difference (take-away) between 19 and 11, or, 42 and 31.
- 3) If the date is the 26th of June, what was the date 3 days ago?

- 1) If a toy costs £5 and a comic costs £4. How much do they both cost altogether?
- 2) Find the answer to $17 - 8$ or $56 - 13$
- 3) What is one less than 40? Or one less than 20?

- 1) Circle the biggest number.

36 51 29 43 18


- 2) What number comes **before** 70?

- 3) Tick the triangle.



- 1) What are the next three numbers in this sequence? 23, 21, ____ ____

- 2) What is 13 subtract 0?
- 3) A toy car costs £7. How much do two cars cost?



Y2 Maths – 4 Rules (3) Try to do 2 questions a day

Addition

1) $152 + 141 =$ or $67 + 11 =$ or $16 + 10 =$

2) $173 + 125 =$ or $54 + 35 =$ or $18 + 11 =$

Subtraction

1) $94 - 53 =$ or $92 - 81 =$ or $25 - 5 =$

2) $78 - 24 =$ or $82 - 20 =$ or $29 - 12 =$

Multiplication

1) $3 \times 5 =$ and $9 \times 10 =$ and $4 \times 2 =$

2) $1 \times 10 =$ and $10 \times 2 =$ and $8 \times 5 =$



RT:

Set out correctly, one digit per square and line numbers up in H T U.



Division


1) Share 15 biscuits between 3 people. How many will each person get?


2) Share 20 tennis balls between 5 people. How many will each person get?


Fractions

1) Find one half of (RT divide (share) by 2): 6 or 18

2) Find one quarter of (RT divide (share) by 4) 4 or 24







Answers Y2 Mental Maths 3 – 15 questions, try to do 3 every day



- 1) What is 10 plus 5? **15**
- 2) What is 20 minus 6? **14**
- 3) Write down the number thirty seven in numbers. **37**

- 1) Add together 5 and 8, **13** or, 35 and 8 **43**
- 2) Find the difference (take-away) between 19 and 11 **8**,
or, 42 and 31. **9**
- 3) If the date is the 26th of June, what was the date
3 days ago? **23rd June**

- 1) If a toy costs £5 and a comic costs £4. How much
do they both cost altogether? **£9**
- 2) Find the answer to $17 - 8$ **9** or $56 - 13$ **43**
- 3) What is one less than 40? **39** Or one less than 20? **19**

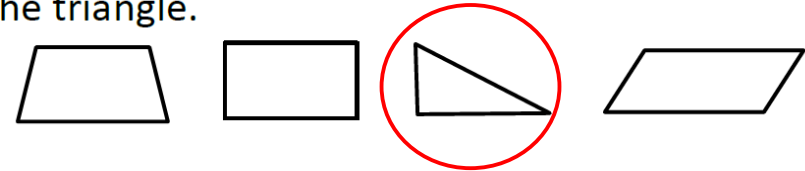


- 1) Circle the biggest number.


36 **51** 29 43 18

- 2) What number comes **before** 70? **69**

- 3) Tick the triangle.



- 1) What are the next three numbers in this sequence? 23, 21, 19, 17
15
- 2) What is 13 subtract 0? **13**
- 3) A toy car costs £7. How much do two cars cost?



£14

Answers Y2 Maths – 4 Rules (3) Try to do 2 questions a day

Addition

1) $152 + 141 = 293$ or $67 + 11 = 78$ or $16 + 10 = 26$

2) $173 + 125 = 298$ or $54 + 35 = 89$ or $18 + 11 = 29$

Subtraction

1) $94 - 53 = 41$ or $92 - 81 = 11$ or $25 - 5 = 20$

2) $78 - 24 = 54$ or $82 - 20 = 62$ or $29 - 12 = 17$

Multiplication

1) $3 \times 5 = 15$ and $9 \times 10 = 90$ and $4 \times 2 = 8$

2) $1 \times 10 = 10$ and $10 \times 2 = 20$ and $8 \times 5 = 40$

RT:

Set out correctly, one digit per square and line numbers up in H T U.



Division

1) Share 15 biscuits between 3 people. How many will each person get? **5**

2) Share 20 tennis balls between 5 people. How many will each person get? **4**

Fractions

1) Find one half of (RT divide (share) by 2): **6 3** or **18 9**

2) Find one quarter of (RT divide (share) by 4) **4 1** or **24 6**